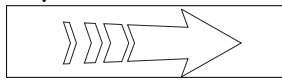


Walk on down the slope and to the beginning of the concrete bridge.

12

Stand with your back to the Farmhouse - is the stream running from ...



Left to Right



OR



Right to Left

Answers

13




Look back to the Farmhouse - how many chimneys can you see on the roof?

3

Walk over the bridge and turn right along the path, carry on to the wooden platform at the pond.

14

Draw 3 things that you see living in or near the edge of the pond.



15

Look up the slope behind the pond - you will see this

What do you think the wires are for?



Electricity

16

Carry on along the path, following the stream.

Draw the rest of this picture



Turn around and go back along the path to the concrete bridge.

17

At the bridge, walk carefully with one foot tightly in front of the other (Heel to Toe touching) and count how many STEPS it is from one side to the other.

35 - 40

18

Now count how many PACES it is.

18 - 20

19

Carry on to the grass - here is an example silhouette of a tree, now draw a silhouette of a tree that you can see.

